



GOING FOR GOLD

Problem Solving

Silver Paper 4

Q	Topic	My Mark	Maximum Marks
1	Ratio		4
2	Probability		5
3	Polygons		3
4	Area		6
5	Pythagoras		3
6	Forming and solving equations		4
7	Percentages		4
8	Circle		5
9	Exchange rates and proportion		5
10	Volume and surface area		4
			43

Question 1 - Ratio

Peter makes a large amount of pink paint by mixing red and white paint in the ratio 2 : 3

Red paint costs £80 per 10 litres

White paint costs £15 per 10 litres.

Peter sells his pink paint in 10-litre tins for £60 per tin.

Calculate how much profit he makes for each tin he sells.

(a) How much red and white paint is needed to make a 10 litre tin of pink paint?

(1 mark)

(b) How much does this amount of red and white paint cost?

(1 mark)

(c) Calculate the profit Peter makes per tin he sells.

(2 marks)

Question 2 - Probability

There are only red counters, blue counters and green counters in a bag. There are 5 red counters. There are 6 blue counters. There is 1 green counter.

Jim takes at random a counter from the bag.

(a) (i) Work out the probability that he takes a red counter.

- How many counters are there in total?
- How many red counters are there?

(ii) Work out the probability that he takes a counter that is not red.

(3 marks)

Jim puts the counter back in the bag. He then puts some more green counters into the bag. The probability of taking at random a red counter is now $\frac{1}{3}$.

(b) Work out the number of green counters that are now in the bag.

- The number of red counters in the bag (which hasn't changed) is now $\frac{1}{3}$ of the total number of counters in the bag.

(2 marks)

Question 3 - Polygons

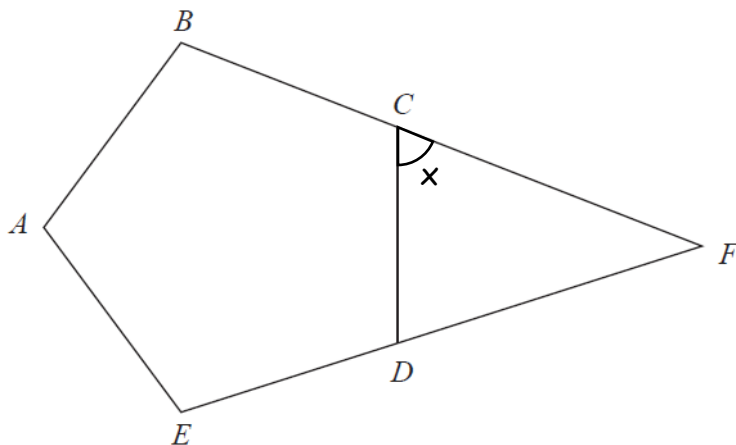


Diagram **NOT**
accurately drawn

$ABCDE$ is a regular pentagon.

BCF and EDF are straight lines.

Work out the size of angle CFD .

You must show how you got your answer.

Information you need:

For all polygons the external angles total 360

To find the external angle of any polygon calculate

$$360 \div n \quad (\text{where } n \text{ is number of sides})$$

a) Calculate the external angle for the pentagon (x)

(1 mark)

b) Use this information to find angle CFD .

(2 marks)

Question 4 - Area

Jenny is redecorating her bathroom, which is 2.8m wide, 3.5m long and 3m high.

She tiles one of the smaller walls and paints the other 3 walls.

The tiles are 35cm by 70cm and are sold in boxes of 10.

Each box costs £15.

Paint is sold in tins which costs £8.99 and covers 4.5 square metres.

Which will cost her more the paint or the tiles? How much more?

(a) Smaller walls are 280cm wide and 300cm high.

What is the area of one of the smallest walls?

Larger walls are 350cm long and 300cm high.

What is the area of one of the larger walls?

(1 mark)

(b) Tiles are 35cm by 70cm. What is the area of a tile? Calculate how many boxes of tiles are needed to cover one of the smaller walls. How much would this cost?

(3 marks)

(c) Calculate the area of 2 larger walls and 1 smaller wall in m^2 .

(d) Each tin of paint covers 4.5 square metres. How many tins of paint would Jenny need to buy? How much would this cost?

(1 mark)

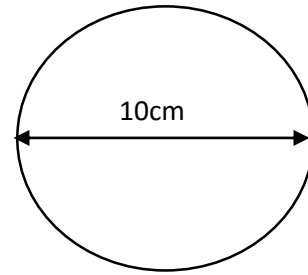
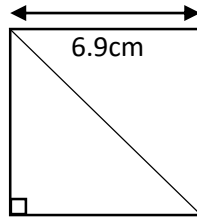
(g) Which will cost her more the paint or the tiles? How much more?

(1 mark)

Question 5 - Pythagoras

A circle has a diameter of 10cm.

A square has side lengths of 6.9cm.



Use Pythagoras' theorem to show that the square will fit inside the circle without touching the edge of the circle.

(a) Label the triangle above, and use Pythagoras' theorem to find the length of the diagonal.

(2 marks)

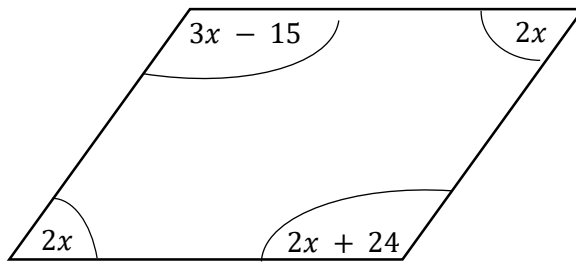
(c) How does this show that the square will fit inside the circle?

(1 mark)

Question 6 - Forming and solving equations

The diagram shows a parallelogram.

Work out the sizes of the angles in the parallelogram.



(a) Set up an equation by adding up the values of the angles in the diagram.

(1 mark)

(b) Solve your equation.

(2 marks)

(c) Substitute your value of x into the 4 angles to find the size of each angle.

(Check that your answers add up to 360)

(1 mark)

Question 7 - Percentages

The pressure at sea level is 101325 Pascals.

Any rise of 1km above sea level decreases the pressures by 14%.

For example,

At 3km above sea level the pressure is 14% less than at 2km.

Work out the pressure at 4km above sea level.

Give your answer to 2 significant figures.

(a) For every 1km above sea level, the pressure decreases by 14%.

What is the pressure at 1km above sea level?

(1 mark)

(b) Complete the table below, decreasing the pressure by 14% each time.

Height above sea level (km)	Pressure (Pascals)	14%	Decreased by 14%
0	101325		
1			
2			
3			
4			

(2 marks)

(b) What is the pressure at 4km above sea level?

(1 mark)

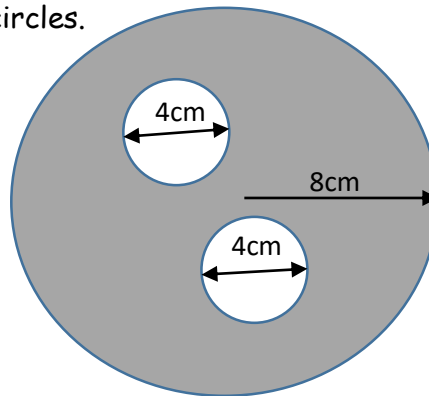
Question 8 - Circle

The diagram shows a large circle and two small circles.

The large circle has a radius of 8cm.

The two smaller circles have a diameter of 4cm.

Find the shaded area.



(a) What is the area of the large outer circle?

(1 mark)

(b) What is the radius of the smaller circles?

(1 mark)

(c) What is the area of the two smaller circles?

(2 marks)

(e) Use your answer to part (a) and part (c) to find the shaded area.

(1 mark)

Question 9 - Exchange rates and proportion

Linda is going on holiday to the Czech Republic.
She needs to change some money into koruna.

She can only change her money into 100 koruna notes.

Linda only wants to change up to £200 into koruna.
She wants as many 100 koruna notes as possible.

The exchange rate is £1 = 25.82 koruna.

How many 100 koruna notes should she get?

(a) Calculate how many koruna are in £200.

(3 marks)

(b) How many 100 koruna notes can Linda get?

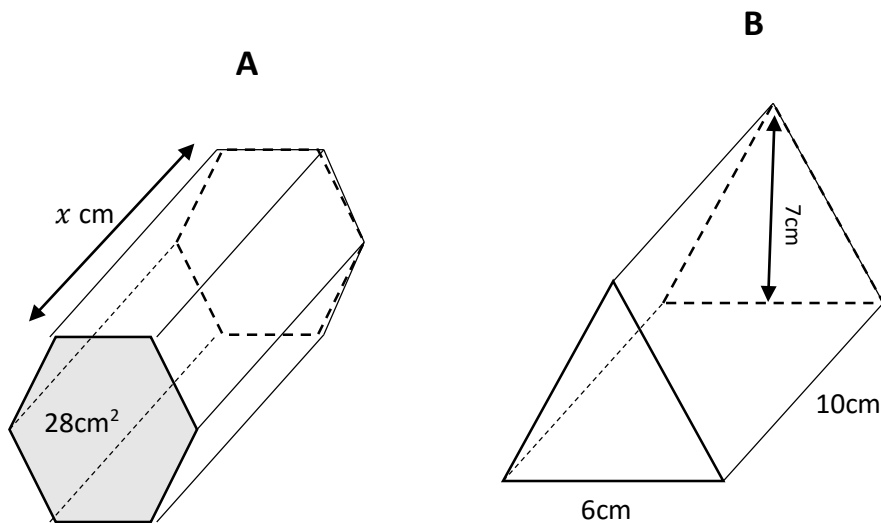
(2 marks)

Question 10 - Volume and surface area

The cross sectional area of shape A is 28cm^2 .

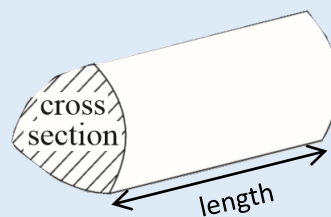
It has a volume that is $1\frac{1}{2}$ times that of shape B.

What is the length x of shape A.



Information you need:

Volume of a prism = cross sectional area \times length



(a) Find the volume of shape B.

(2 marks)

(b) The volume of shape A is $1\frac{1}{2}$ times as big as the volume of shape B.
What is the volume of shape A?

(1 mark)

(c) What is the length of shape A?

(1 mark)